

20以内幼小衔接综合卷

班级: _____ 姓名: _____ 成绩: _____ 用时: _____

一、直接写出得数

$2+12=$

$10+4=$

$12-8=$

$7+9=$

$12+3=$

$11-8=$

$3+11=$

$2+11=$

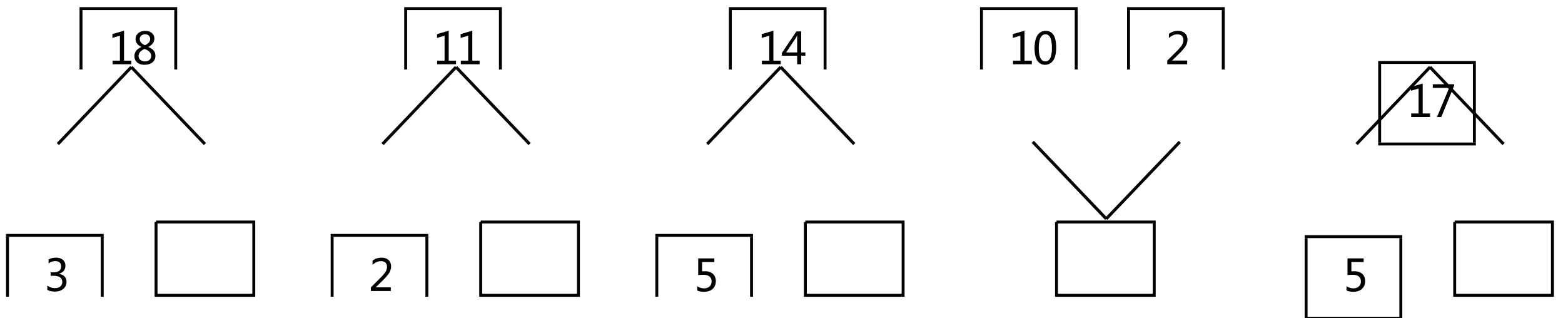
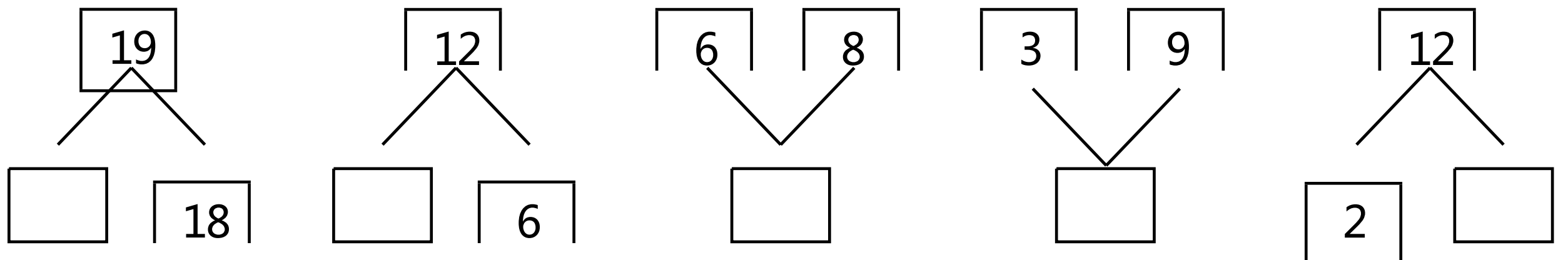
$19-4=$

$8+8=$

$8+10=$

$20-2=$

二、分与合填数



三、在中填入">","<"或"="

$8 \bigcirc 11$

$16 \bigcirc 19$

$12 \bigcirc 13$

$7 \bigcirc 9$

$12 \bigcirc 17$

$15 \bigcirc 7$

$12 \bigcirc 12$

$17 \bigcirc 17$








$15 \bigcirc 16$

$7 \bigcirc 16$



$12 \bigcirc 18$

$14 \bigcirc 6$

四、在空格中填入相邻数



五、看图列算式



20以内幼小衔接综合卷

班级: _____ 姓名: _____ 成绩: _____ 用时: _____

一、直接写出得数

$9+5=$

$7+10=$

$12-6=$

$3+9=$

$13-1=$

$18-3=$

$11+8=$

$18-2=$

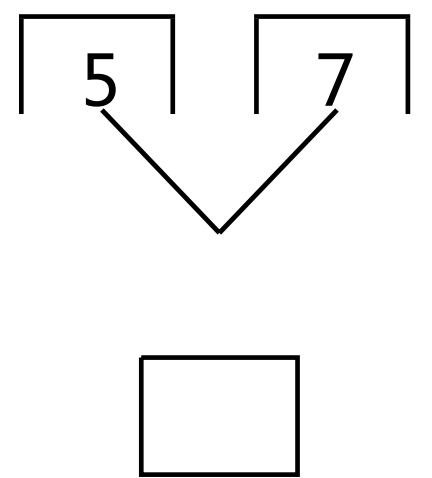
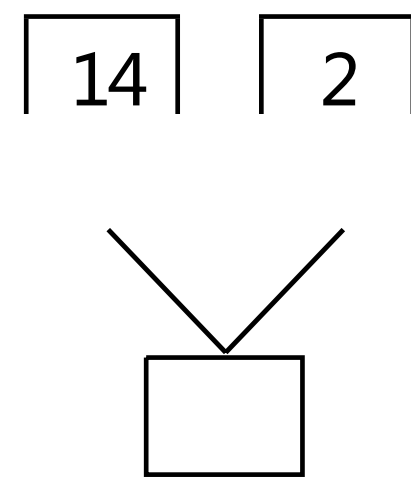
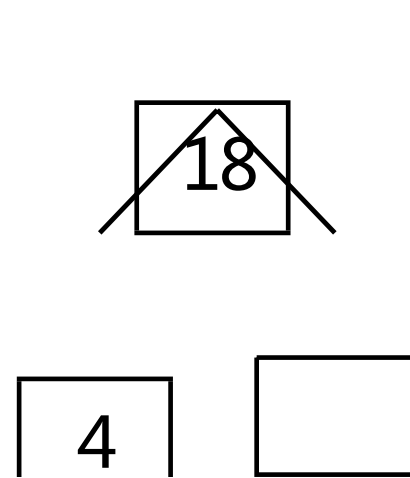
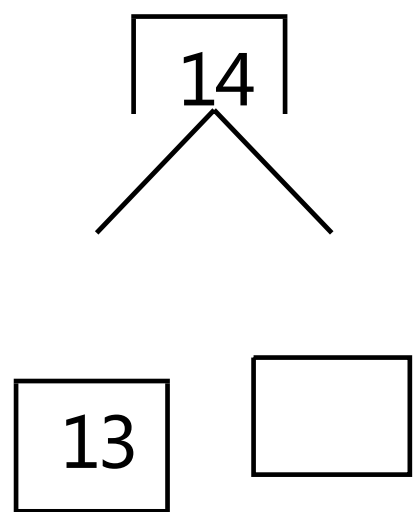
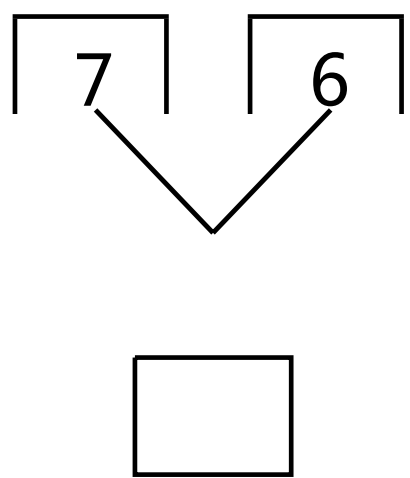
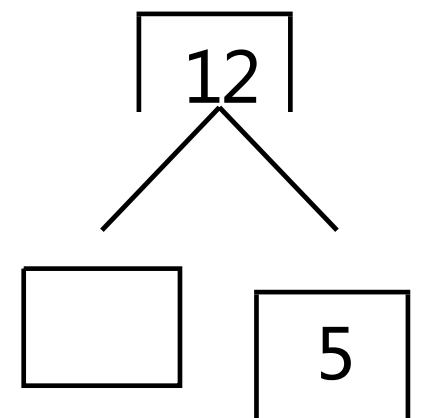
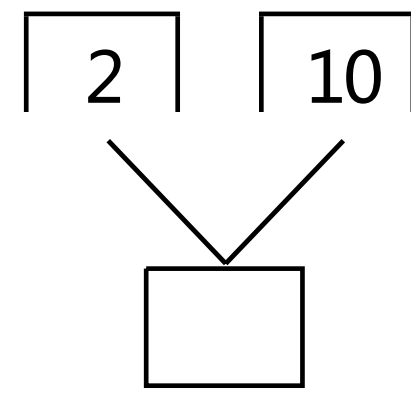
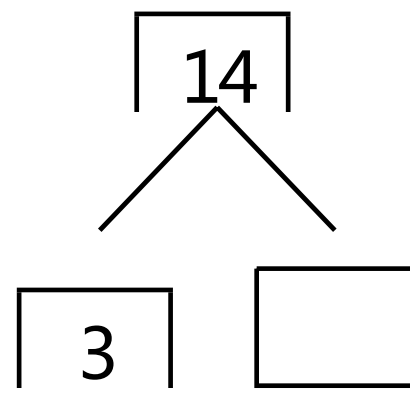
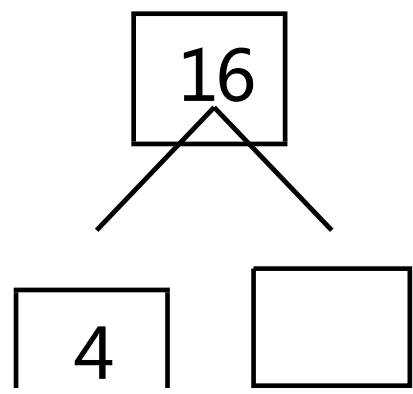
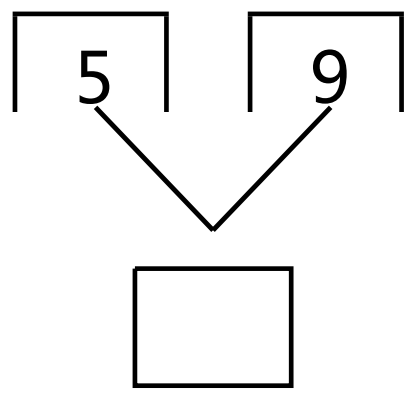
$18-6=$

$13-6=$

$14-2=$

$11-8=$

二、分与合填数



三、在中填入">","<"或"="

$14 \bigcirc 8$

$8 \bigcirc 16$

$9 \bigcirc 12$

$20 \bigcirc 12$

$18 \bigcirc 5$

$20 \bigcirc 7$

$10 \bigcirc 15$

$10 \bigcirc 9$


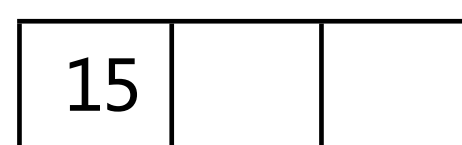





$9 \bigcirc 9$

$5 \bigcirc 18$


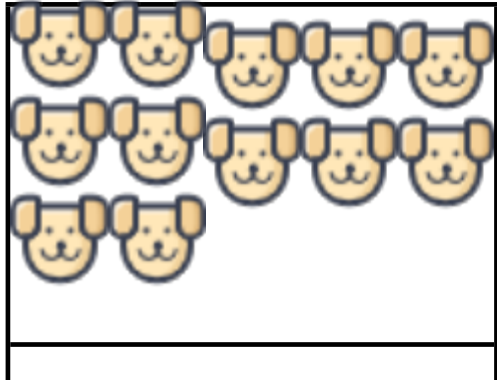
$12 \bigcirc 16$

$19 \bigcirc 8$

四、在空格中填入相邻数



五、看图列算式



20以内幼小衔接综合卷

班级: _____ 姓名: _____ 成绩: _____ 用时: _____

一、直接写出得数

$13-6=$

$19-7=$

$20-4=$

$12+5=$

$20-1=$

$8+10=$

$4+8=$

$11+1=$

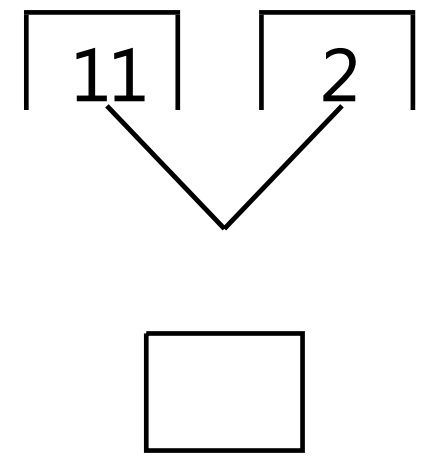
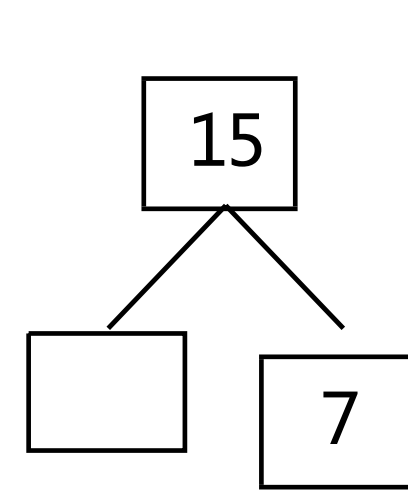
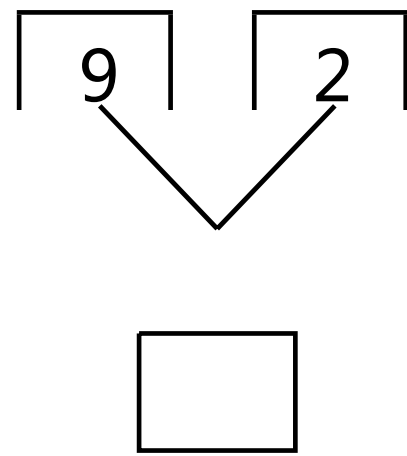
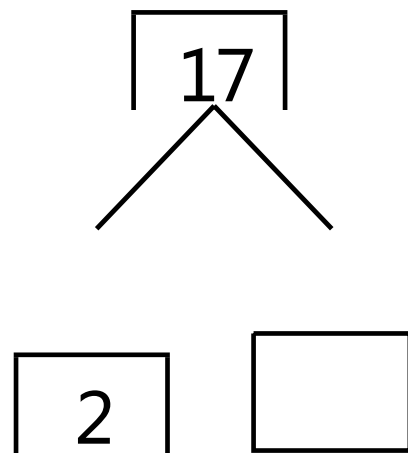
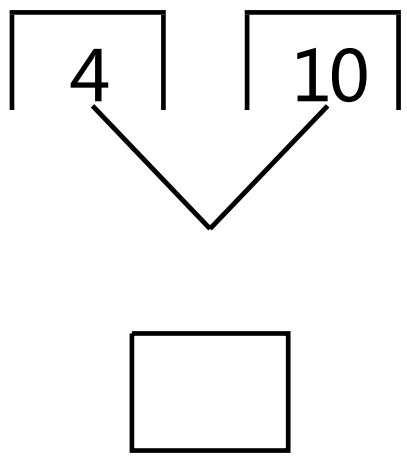
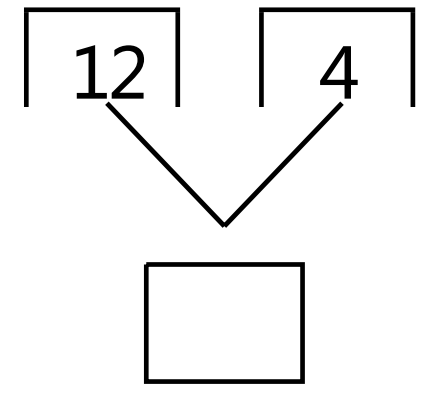
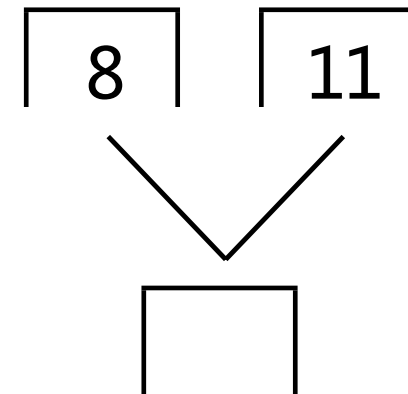
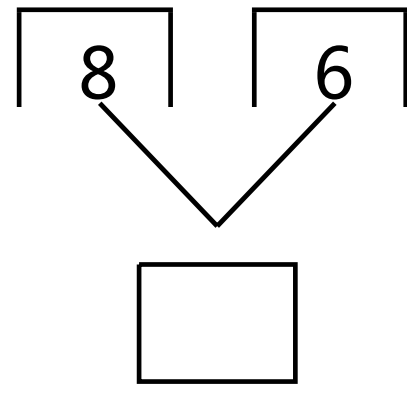
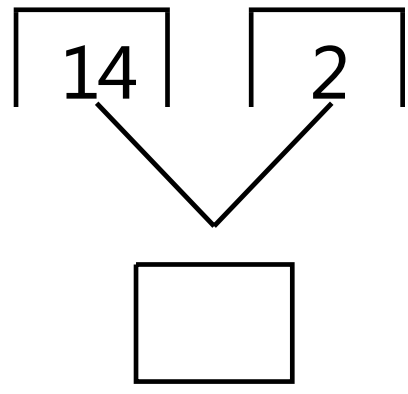
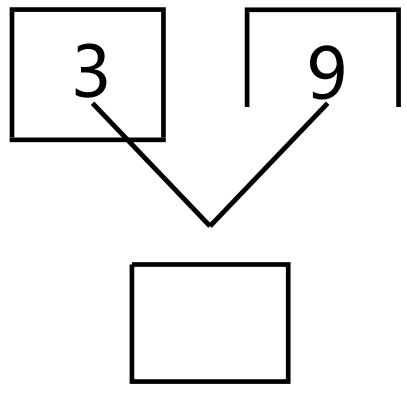
$8+5=$

$20-3=$

$11+2=$

$19-3=$

二、分与合填数



三、在中填入">","<"或"="

$14 \bigcirc 15$

$6 \bigcirc 16$

$14 \bigcirc 6$

$15 \bigcirc 16$

$18 \bigcirc 9$

$16 \bigcirc 14$

$8 \bigcirc 17$

$18 \bigcirc 17$

$17 \bigcirc 16$


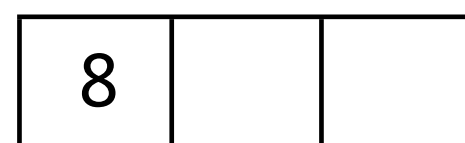



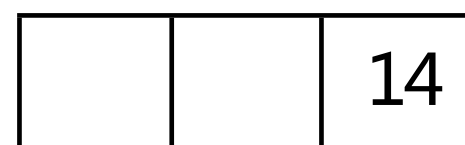


$13 \bigcirc 14$

$11 \bigcirc 11$



$12 \bigcirc 13$

$\bigcirc 11$

四、在空格中填入相邻数



五、看图列算式



20以内幼小衔接综合卷

班级: _____ 姓名: _____ 成绩: _____ 用时: _____

一、直接写出得数

$17-2=$

$15-3=$

$4+13=$

$5+15=$

$12-7=$

$2+11=$

$20-6=$

$20-2=$

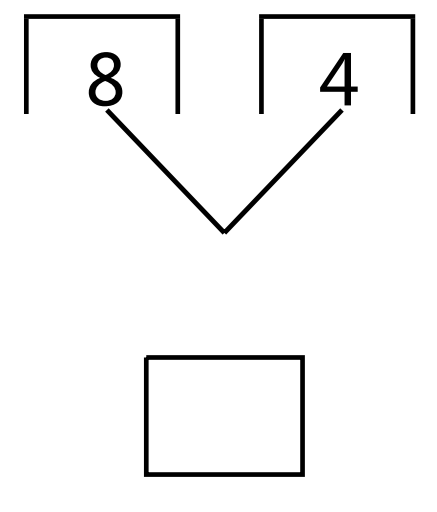
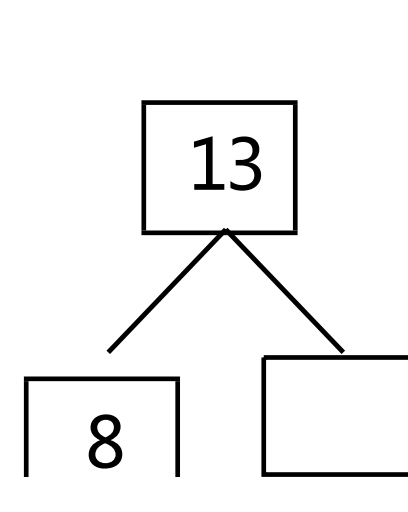
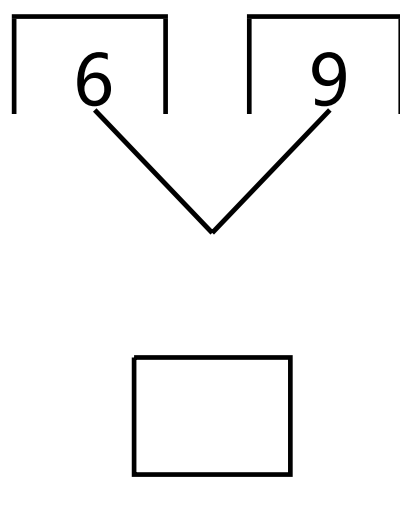
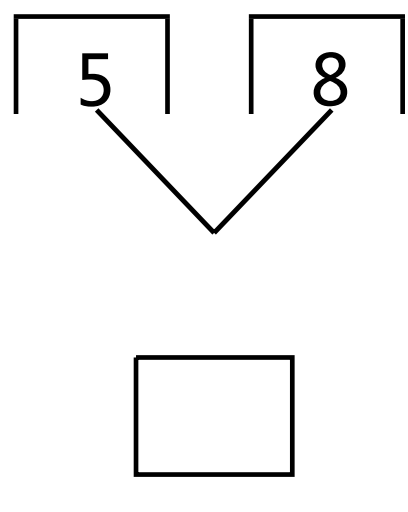
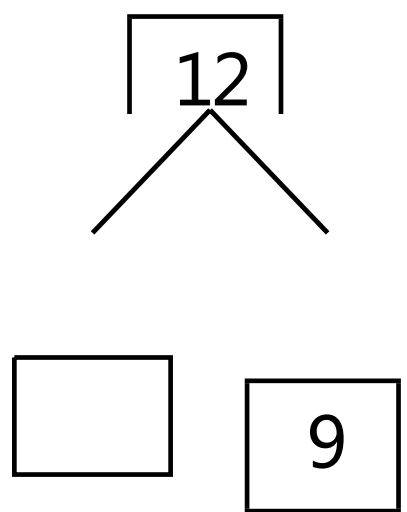
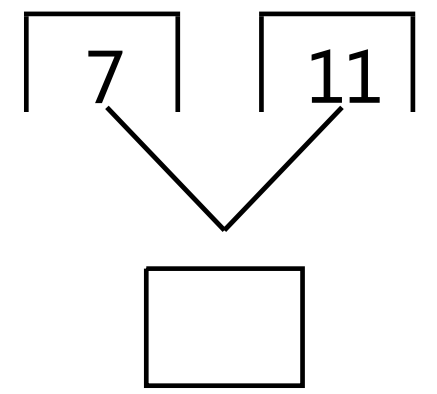
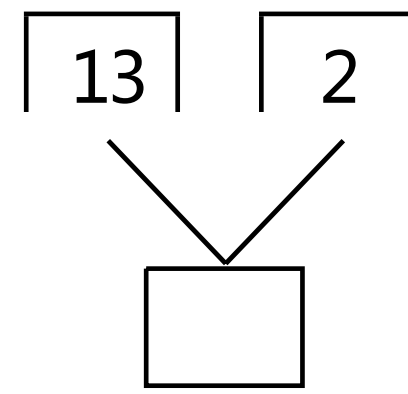
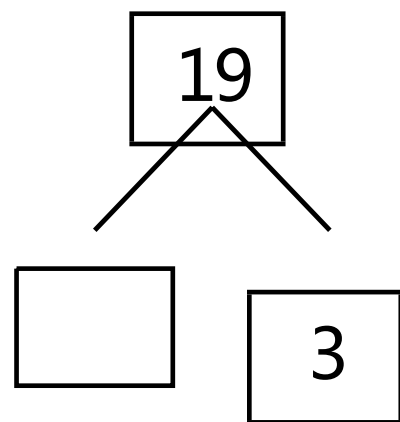
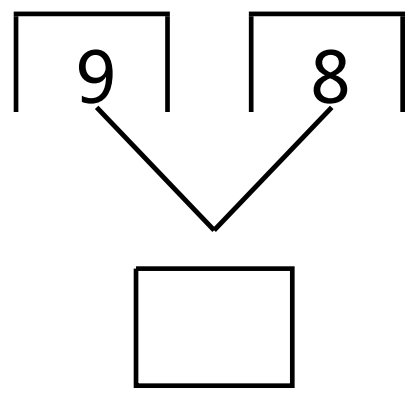
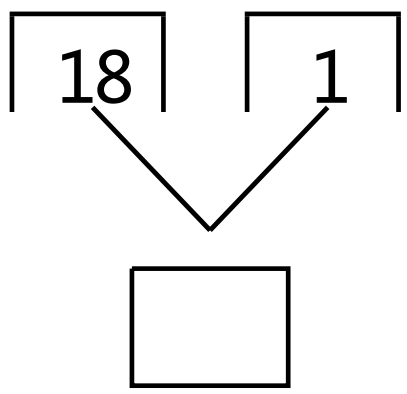
$18+1=$

$4+7=$

$12+7=$

$12-5=$

二、分与合填数



三、在中填入">","<"或"="

$6 \bigcirc 17$

$18 \bigcirc 12$

$19 \bigcirc 19$

$8 \bigcirc 14$

$17 \bigcirc 12$

$14 \bigcirc 10$

$19 \bigcirc 18$

$19 \bigcirc 12$







$10 \bigcirc 15$

$7 \bigcirc 11$

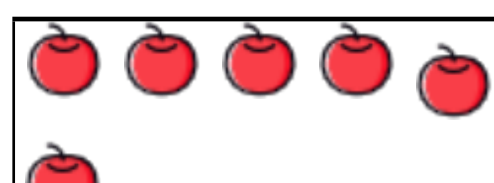
$8 \bigcirc 15$

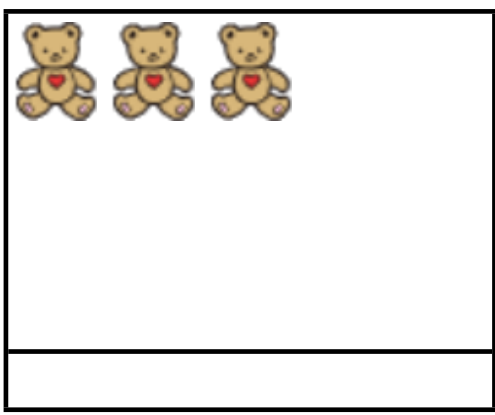
$15 \bigcirc 16$

四、在空格中填入相邻数



五、看图列算式





20以内幼小衔接综合卷

班级: _____ 姓名: _____ 成绩: _____ 用时: _____

一、直接写出得数

$13-5=$

$18-1=$

$15-7=$

$15-6=$

$1+11=$

$19-3=$

$15-8=$

$15+1=$

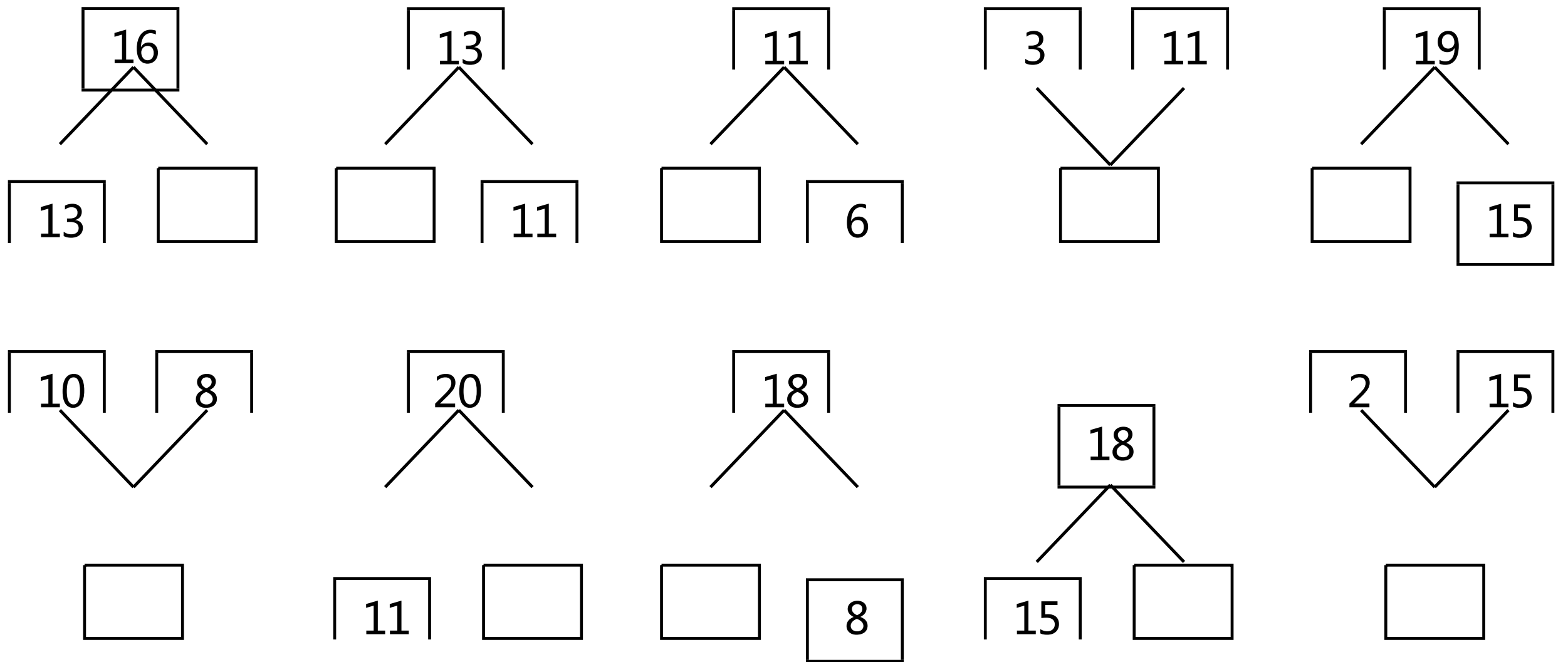
$13+5=$

$18-7=$

$12-7=$

$13-9=$

二、分与合填数



三、在中填入">","<"或"="

$7 \bigcirc 15$

$16 \bigcirc 9$

$11 \bigcirc 8$

$5 \bigcirc 15$

$18 \bigcirc 14$

$9 \bigcirc 8$

$14 \bigcirc 11$

$10 \bigcirc 16$

$12 \bigcirc 5$


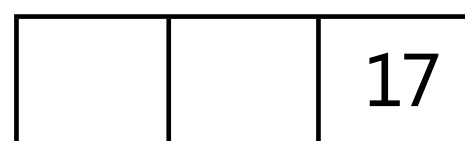





$10 \bigcirc 8$

$13 \bigcirc 15$


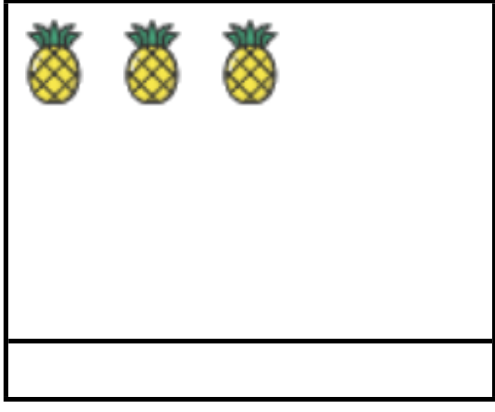
$7 \bigcirc 19$

$\bigcirc 9$

四、在空格中填入相邻数



五、看图列算式



以上内容仅为本文档的试下载部分，为可阅读页数的一半内容。如要下载或阅读全文，请访问：<https://d.book118.com/345144233044012131>