



# 看图列式计算

一. 看图填空。



$$1 + \square = \square$$



$$3 + \square = \square$$



$$\square + 3 = \square$$




$$\square + 2 = \square$$



$$3 + \square = \square$$




$$5 + \square = \square$$



$$\square + \square = 3$$



$$\square + \square = 4$$



$$\square + 1 = \square$$



$$\square + 1 = \square$$



$$4 - \square = \square$$



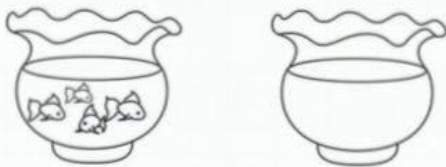
$$6 - \square = \square$$




$$\square - 2 = \square$$




$$\square - 3 = \square$$



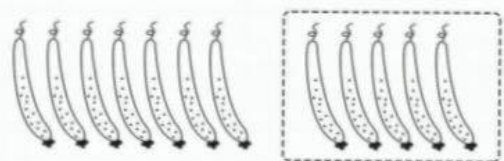
$$4 - \square = \square$$



$$7 - \square = \square$$



$$\square - \square = 1$$



$$\square - \square = 7$$



$$\square - 4 = \square$$



$$\square - 1 = \square$$

以上内容仅为本文档的试下载部分，为可阅读页数的一半内容。如要下载或阅读全文，请访问：<https://d.book118.com/657056122050010003>